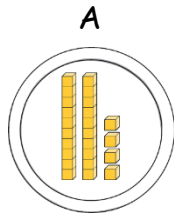
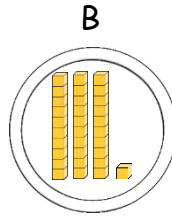


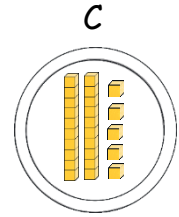
LQ: Can you order numbers and objects?

Task 1: Find the **highest**/ **lowest** number from a group

Tick the **highest** number in each group





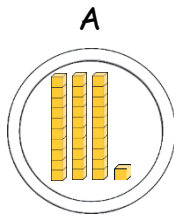


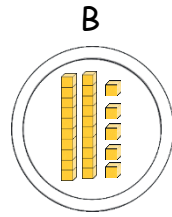
A
37

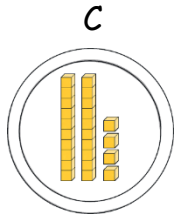
B
48

C
73

Tick the **lowest** number in each group







A
55

B
54

C
45

Look at the cards- Which 2-digit numbers can you make?

7 5 2

*What is the highest number?

*What is the lowest number?

Task 2: Order these numbers highest to lowest

28

21

11

34

31

highest		lowest		

Order these numbers lowest to highest

68

89

81

64

88

lowest		highest		



Pirate Challenge



Decide how to order the pirates treasure chests.



Izzy



Jake



Cubby



Parrot



<i>First</i>	
<i>Second</i>	
<i>Third</i>	
<i>Fourth</i>	

*How have you decided to order the pirates treasure chests?
