
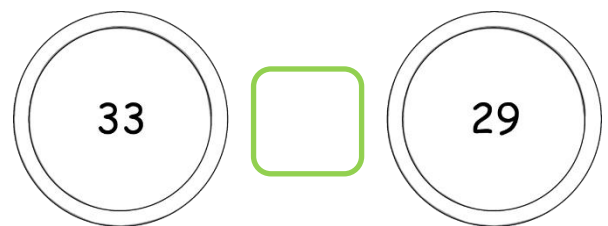
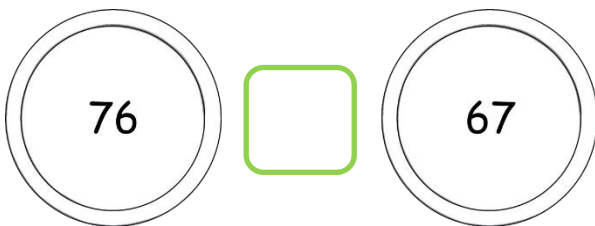
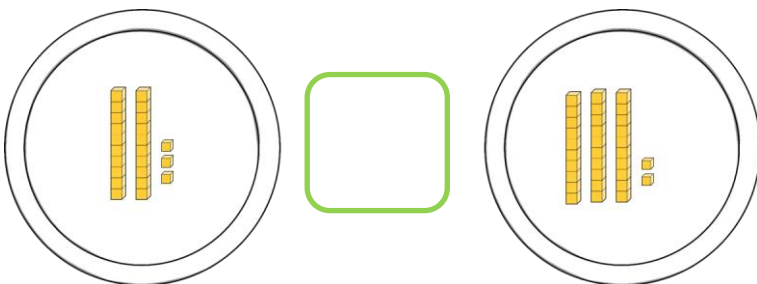




LQ: Can you compare numbers using symbols?

**Task 1: Which plate would Chomp eat?**



Draw **Chomp**



**True or False**

\*Circle the biggest number



Example

67 > 74 ☹️

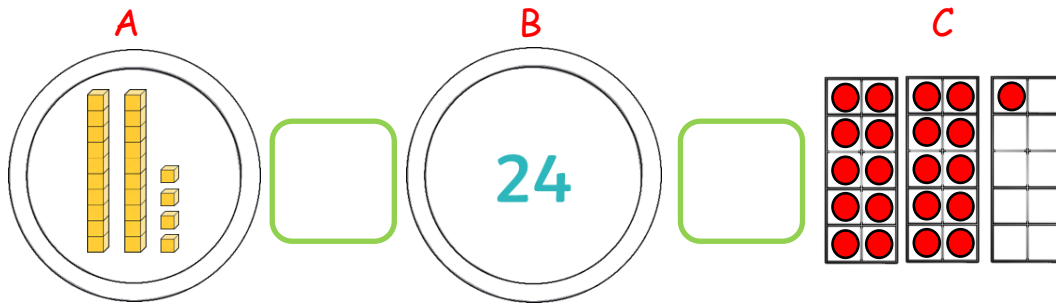
36 < 34

48 < 54

89 > 79

5 tens and 8 ones > 5 tens and 9 ones

Task 2: Draw **Chomp** and write the sentences. \*greater than, less than, equal to



A has \_\_\_\_\_

B has \_\_\_\_\_

C has \_\_\_\_\_

A is \_\_\_\_\_ B

B is \_\_\_\_\_ C

C is \_\_\_\_\_ B



## Pirate Challenge- Solve it



*We have found a grid map with numbers missing.*

\*Use the numbers

**1, 2, 4 & 7**

to complete the grid

	<	<	8
^	v	v	
5	<	6	> 3
v	^	v	
	<	9	>

*Remember*

< less than  
> more than